

2.SINIF

1.HAFTA ETKİNLİKLERİ



Facebook Grubumuz: <https://www.facebook.com/groups/elgityayincilik>



Whatsapp İletişim Adresimiz: 0 (544) 386 23 99

www.elgityayincilik.com

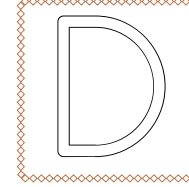
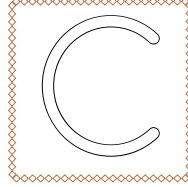




Aşağıda verilen eksik harfleri tamamlayalım ve boyayalım.

K

E

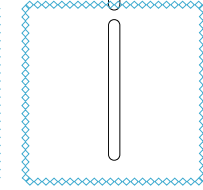
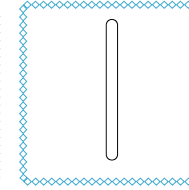


R



T

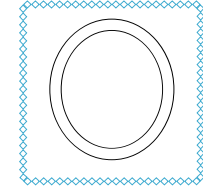

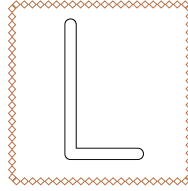


P

H



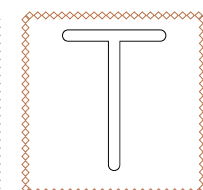



D

Y





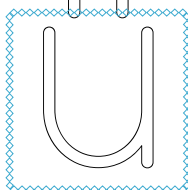

I

Z



U

G



Ç

F

H

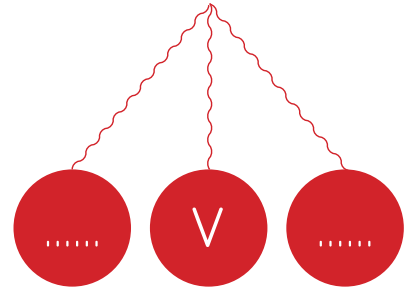
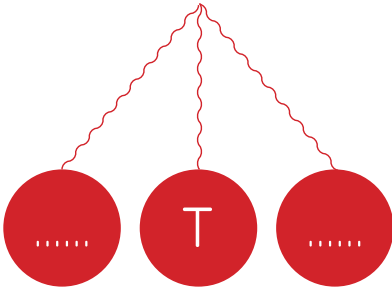

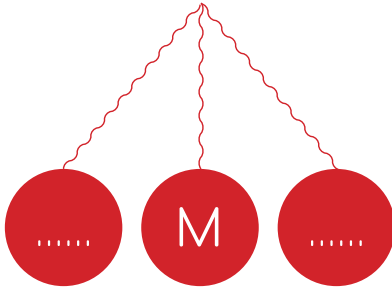

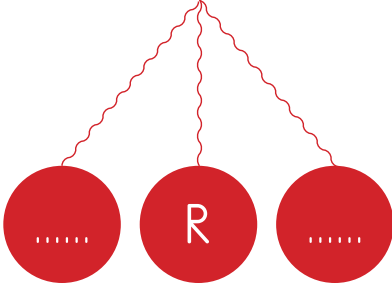
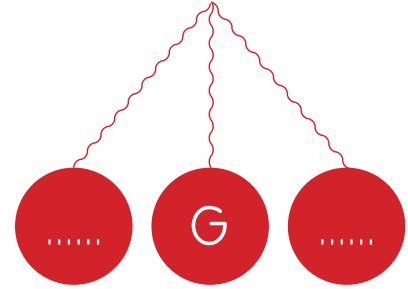
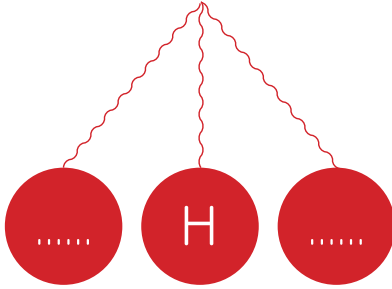

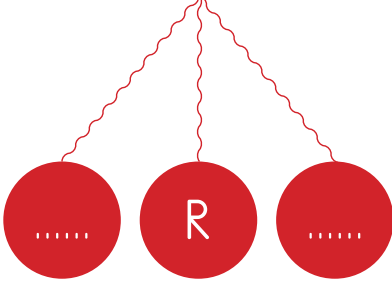


Aşağıda verilen harflerin küçük harflerle tamamlayalım.

A	B	C	Ç	D	E
.....
F	G	Ğ	H	I	İ
.....
J	K	L	M	N	O
.....
Ö	P	R	S	Ş	T
.....
U	Ü	V	Y	Z	
.....	



Aşağıda verilen harflere göre bir önceki ve bir sonraki harfleri tamamlayınız.





Rakamların yazılış yönlerini dikkate alarak üzerinden geçiniz.

D O Ğ A L S A Y I L A R

1	2	3	4	5	6	7	8	9	10
11	12	13	14	15	16	17	18	19	20
21	22	23	24	25	26	27	28	29	30
31	32	33	34	35	36	37	38	39	40
41	42	43	44	45	46	47	48	49	50
51	52	53	54	55	56	57	58	59	60
61	62	63	64	65	66	67	68	69	70
71	72	73	74	75	76	77	78	79	80
81	82	83	84	85	86	87	88	89	90
91	92	93	94	95	96	97	98	99	100




Aşağıda verilen rakamları onluk ve birlik olarak gösterelim ve yazalım.

SAYI	ONLUK VE BİRLİK GÖSTERİMİ	ONLUK VE BİRLİK YAZILIŞI
23	 onluk birlik
54	 onluk birlik
38	 onluk birlik
42	 onluk birlik
85	 onluk birlik
17	 onluk birlik
67	 onluk birlik
13	 onluk birlik
93	 onluk birlik



Aşağıda verilen görselleri sayarak bir deste ve düzineye tamamlayalım.



Kalemlerin sayısı:

Eksik kalem sayısı:

Bir deste kalem sayısı:



Ağaçların sayısı:

Eksik ağaç sayısı:

Bir düzine ağaç sayısı:



Armutların sayısı:

Eksik armut sayısı:


Bir deste armut sayısı:



Balıkların sayısı:

Eksik balık sayısı:


Bir deste balık sayısı:



Çileklerin sayısı:

Eksik çilek sayısı:

Bir deste çilek sayısı:



Çiçeklerin sayısı:

Eksik çiçek sayısı sayısı:

Bir deste çiçek sayısı:

♥ Aşağıda verilen alanları tamamlayalım.

BİZE KENDİNİ ANLATIR MISIN?

En sevdiğin renk?

En sevdiğin yiyecek?

En sevdiğin içecek?

En sevdiğin arkadaşın?



Herkes aynı fiziksel özelliklere sahip olabilir mi? Neden?

Yetenekli olduğun yönlerin neler? Bu yeteneklerin başka arkadaşlarında da var mı?

♥ Complete the missing words. (Eksik harfleri tamamlayalım.)



g _ a _ s



_ o _ e _



t _ e e



h _ r s _



g_a_s



p _ r _



s _ h _ _ l



c _ w



g _ f _



f _ o _ e _

♥ Mark the correct word. (Doğru kelimeyi işaretleyin.)

 tea tae appel apple house huose lemon leymon radoi radio yellow yelow chair chiar autumn autun water watir dest desk

 Boyayalım.

